

PassTest

Bessere Qualität , bessere Dienstleistungen!



Q&A

<http://www.passtest.de>

Einjährige kostenlose Aktualisierung

Exam : **000-048**

Title : Rhapsody in C++

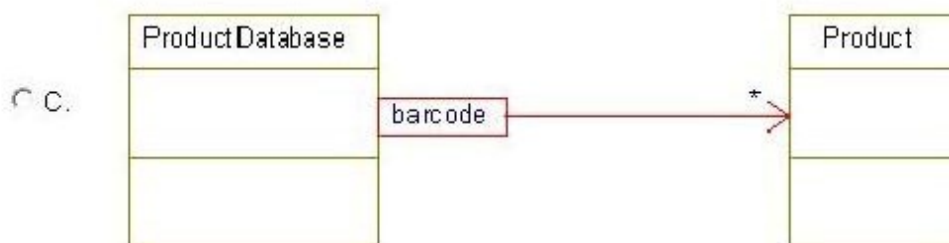
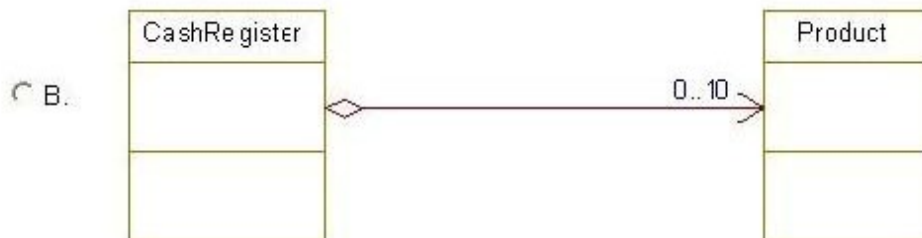
Version : Demo

1.Which tool is used to capture requirements from a Word document?

- A. DoDAF
- B. Gateway
- C. DiffMerge
- D. ClearCase

Answer: B

2.Which type of relation generates the template class OMMap<Key,Concept>?



- A. Exhibit A
- B. Exhibit B
- C. Exhibit C
- D. Exhibit D

Answer: C

3.What is used to keep a specific set of properties, stereotypes, and tags that can be used across projects?

- A. profile
- B. relation
- C. template
- D. use case

Answer: A

4.Which template class is used when the multiplicity for a relation is * (many) and the order is not specified?

- A. OMList<Concept>
- B. OMIterator<Concept>
- C. OMMMap<Key,Concept>
- D. OMCollection<Concept>





Answer: D

5.Which two steps should be taken before running an animated sequence diagram? (Choose two.)

- A. inject events
- B. create a base diagram
- C. open the animated diagram
- D. call the OUT_PORT macro

Answer: B,C

6.Which symbol adds a condition mark to a sequence diagram?

- A. 
- B. 
- C. 
- D. 

- A. Exhibit A
- B. Exhibit B

C. Exhibit C

D. Exhibit D

Answer: A

7.From which framework class does an <<active>> object inherit the execute() operation?

A. OMEvent

B. OMThread

C. OMTIMEOUT

D. OMReactive

Answer: B

8.Which statement is true about animated sequence diagrams?

A. Events must be injected manually.

B. Only Display sequence diagrams can be animated.

C. Only Analysis sequence diagrams can be animated.

D. They must be based off an existing sequence diagram.

Answer: D

9.What is the Rhapsody-generated pointer that allows access to the arguments of an event?

A. props

B. params

C. behavior

D. itsMutex

Answer: B

10.What is the purpose of the OUT_PORT macro?

A. to send an event to another object

B. to allow a message to be sent via a port

C. to create an event and inject it into an animatedstatechart

D. to display the return value on animated sequence diagrams

Answer: B